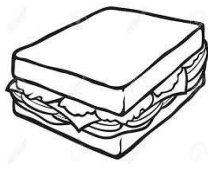


## Countable or Uncountable?

Label the objects and write their names in the chart:



1.....




2.....



3.....



4.....



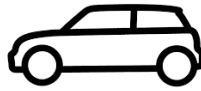
5.....



6.....



7.....



8.....



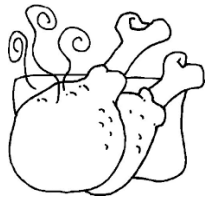
9.....



10.....



11.....



12..... 13.....



14.....



15.....

COUNTABLE	UNCOUNTABLE